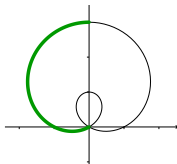


Polar Equations

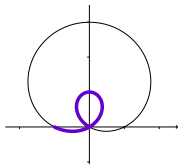


Question

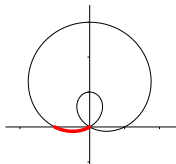
There are four copies of the graph of $r = 1 + 2 \sin(\theta)$ below, each with a different arc highlighted. Which figure has the highlighted arc corresponding to $\pi \leq \theta \leq 7\pi/6$?



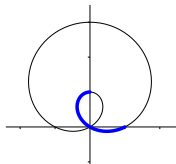
A.



B.



C.



D.