

Three Dimensional Coordinate Systems

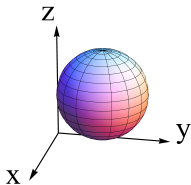


Question

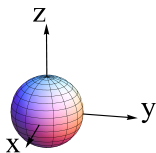
Which of the following correctly depicts the sphere given by the equation

$$x^2 + (y - 2)^2 + (z - 2)^2 = 4?$$

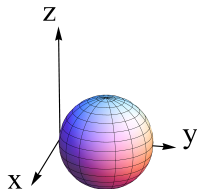
A.



B.



C.



D.

