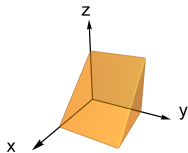


Question

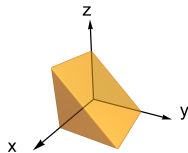
Identify the region of integration of the iterated triple integral

$$\int_0^1 \int_x^1 \int_0^1 f(x, y, z) dz dy dx.$$

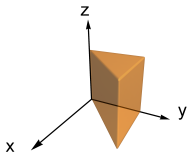
A.



B.



C.



D.

