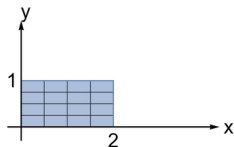


Change of Variables

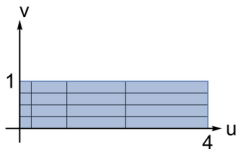


Question

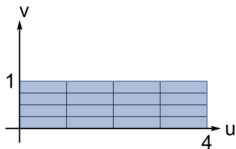
Which picture is the image of the grid region shown at right under the transformation $u = x^2$, $v = y$?



A.



B.



C.

